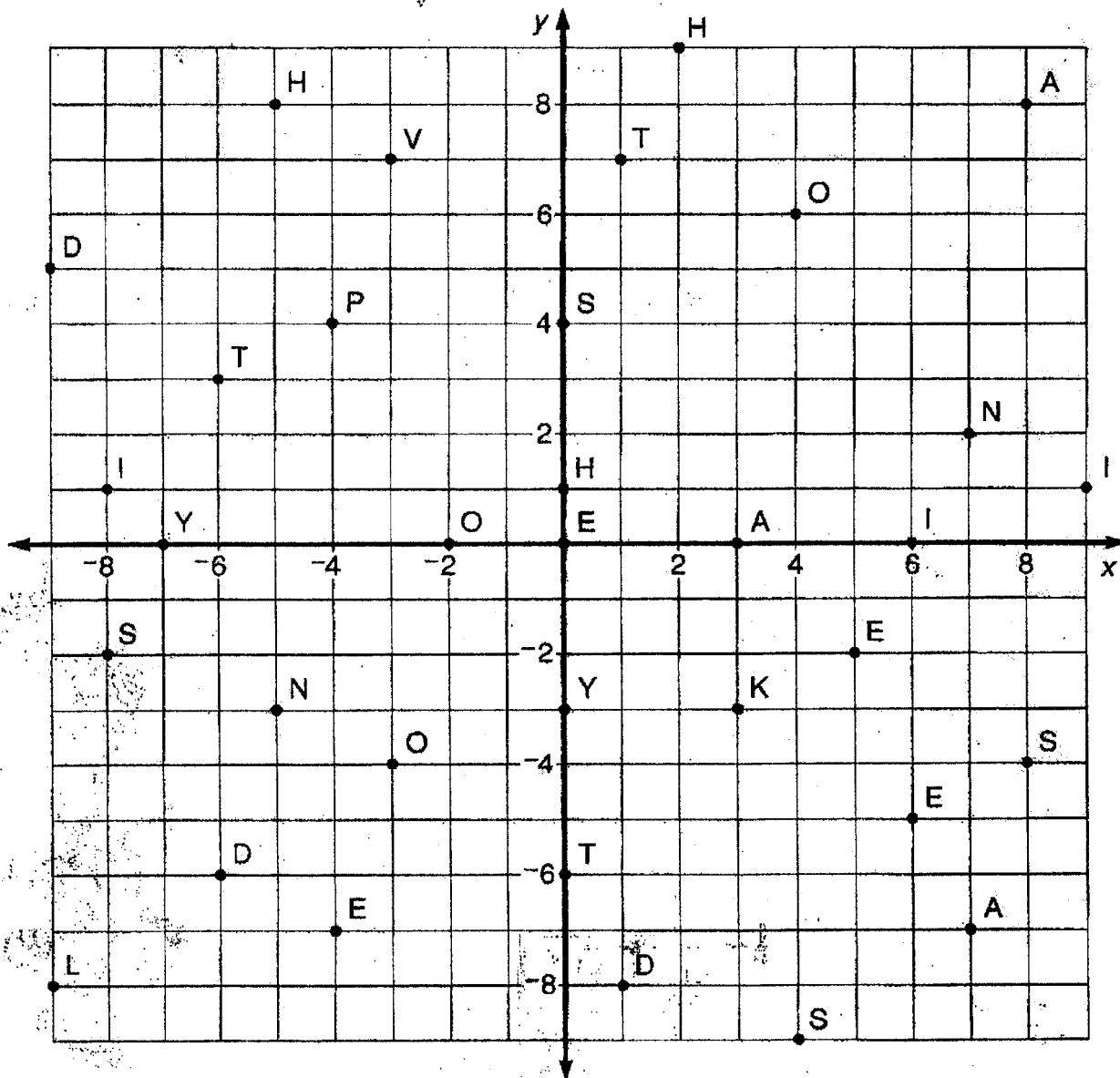


# Why Is a Mother Kangaroo Unhappy When It Rains?

Each ordered pair at the bottom of the page represents a point on the coordinates below. Above each ordered pair, write the letter that appears at that point.



$(4,6)$   $(7,2)$   $(-6,3)$   $(-5,8)$   $(-3,-4)$   $(-8,-2)$   $(6,-5)$   $(1,-8)$   $(3,0)$   $(-7,0)$   $(0,4)$

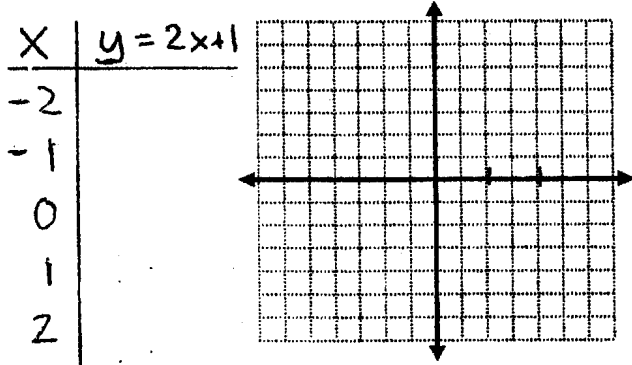
$(0,-6)$   $(2,9)$   $(-4,-7)$   $(3,-3)$   $(-8,1)$   $(-6,-6)$   $(4,-9)$   $(0,1)$   $(8,8)$   $(-3,7)$   $(5,-2)$

$(1,7)$   $(-2,0)$   $(-4,4)$   $(-9,-8)$   $(7,-7)$   $(0,-3)$   $(9,1)$   $(-5,-3)$   $(8,-4)$   $(6,0)$   $(-9,5)$   $(0,0)$

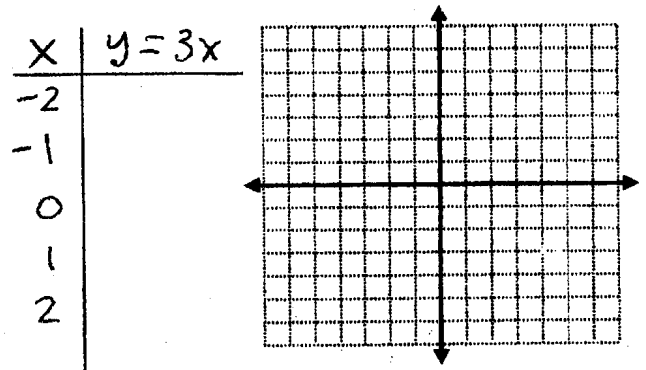
Name: \_\_\_\_\_

Fill out a t-chart, and then graph the following equations:

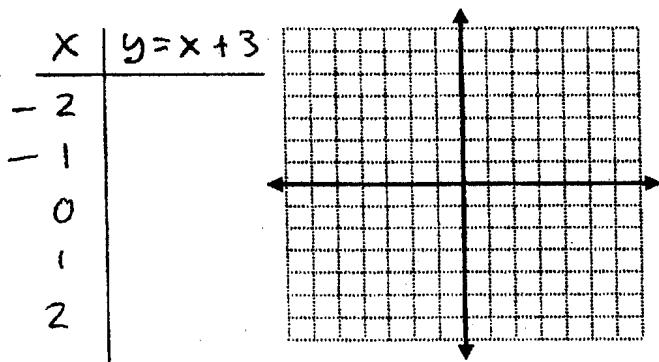
1.  $y = 2x + 1$



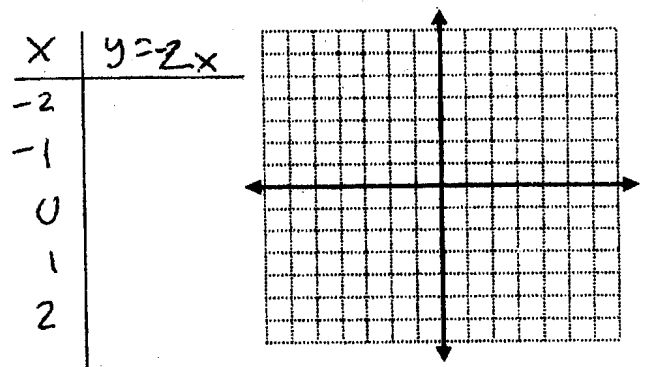
2.  $y = 3x$



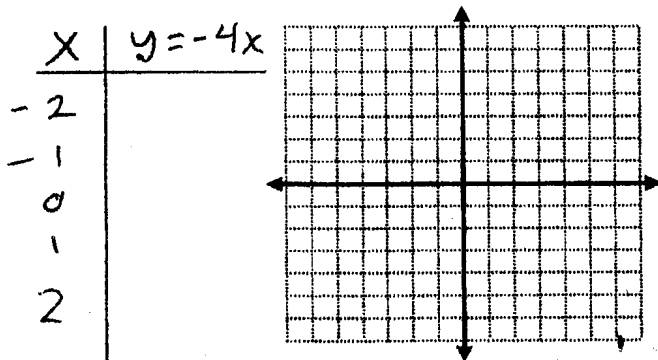
3.  $y = x + 3$



4.  $y = -2x$



5.  $y = -4x$



6.  $y = -2x + 2$

